



## World Mathematics Olympiad (WMO) Standard: II





### Instructions:

*There are three Sections and total 23 questions.  
Attempt all the questions.  
There is no negative marking for the wrong answers.  
Time: 60 minutes*

### Doers Section

No. of Questions:17  
Marks for each question: 4

1 . Which one is a 3D structure?




1	2	3	4
			

- a 1
- b.2
- c. 3
- d.1 & 3

2 which is the largest two digits number?

- a. 99
- b. 69
- c. 10
- d.66

3. Which one is correct.

1	2	3
		

- a. 1 is heavier than 2
- b. 2 is heavier than 3
- c. 1 is heavier than 3
- d. 3 is the heaviest among all

4 Find the smallest two digits number in the series

**99, 93, 49, 19, 91**

- a. 99
- b. 93
- c. 19
- d. 49

5. Find total number of balls.



- a. 9
- b. 10
- c. 11
- d. 12

WORLD OLYMPIADS  
ASSOCIATION  
Be Future Ready

6. Find the sum.

$$25+14+11$$

- a. 30
- b. 20
- c. 50
- d. 40

7. If  stands for 3, then    stands for

- a. 9
- b. 18
- c. 3
- d. 30

8. What is the tens digit in **86**

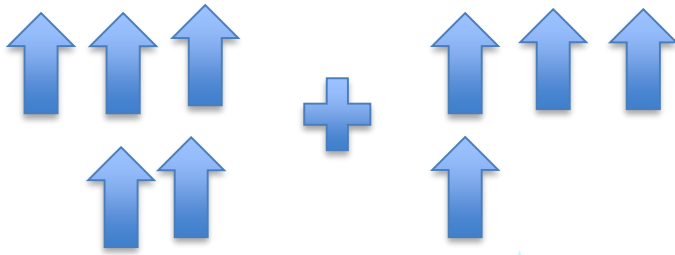
- a. 8
- b. 6
- c. 10
- d. 80

9. Find the missing number  $6+ \underline{\quad} = 18$

- a. 12
- b. 13
- c. 9
- d. 6

**WORLD OLYMPIADS**  
**ASSOCIATION**  
**Be Future Ready**

10.



a	
b	
c	
d	

11. 1 kilogram = ..... Grams.

- a. 1000
- b. 100
- c. 500
- d. 200

12. How many days are in the month of March?

- a.28
- b.29
- c.30
- d.31

WORLD OLYMPIADS

ASSOCIATION

Be Future Ready

13. Which of the following is the predecessor of 439?

- a. 449
- b. 438
- c. 440
- d. 349

14. Find the next number in the sequence

**11,15,19, \_\_\_\_**

- a. 23,
- b. 24
- c. 22
- d. 19

15. What is the correct number word for **336**

- a. Three Hundred Thirty-Four
- b. Three Hundred Thirty-One
- c. Three Hundred Thirty-Six
- d. Three Hundred

16. Which number replaces the question mark?

Before	Number	After
669	?	671

- a. 668
- b. 670
- c. 671
- d. 966

Q.17 How can forty-nine be written in numerals?

- a.  $40+9$
- b.  $4+90$
- c.  $44+9$
- d.  $4+99$

## Executors Section

No. of Questions: 4  
Marks for each question: 5

18. Length of which cannot be measured using hand span?

- a. Book
- b. Train
- c. Pencil
- d. Class Desk

19. How many ladybirds are in the picture?



- a. 14
- b. 15
- c. 16
- d. 17

20. Arrange in ascending order

**69, 96, 66, 99, 109**

a. 66, 96, 69, 99, 109

b. 109, 99, 96, 69, 66

c. 66, 69, 96, 99, 109

d. 69, 99, 66, 96, 109

21. What will be the value of tens digit after adding the numbers 56 and 36 ?

a. 9

b. 5

c. 8

d. 7

## Performers Section

No. of Questions: 2

Marks for each question: 6

22. How many sentence are true?

- A. The addition of 35 and 69 is greater than 100
- B. All the weeks have seven days
- C. The addition of 204 and 404 will be more than 500
- D.  $473 > 437$
- E. 899 is the successor of 888

options


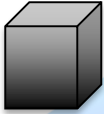


a.1

b.2

c.3

d.4

23. Match the following 3D shapes with their names

A		I	Sphere
B		II	Cone
C		III	Cylinder
D		IV	Cube

options

- a. A-I, B-II, C-III, D-IV
- b. A-II, B-III, C-IV, D-I
- c. A-III, B-IV, C-II, D-I
- d. A-IV, B-III, C-I, D-II

**WORLD OLYMPIADS**  
**ASSOCIATION**  
**Be Future Ready**